

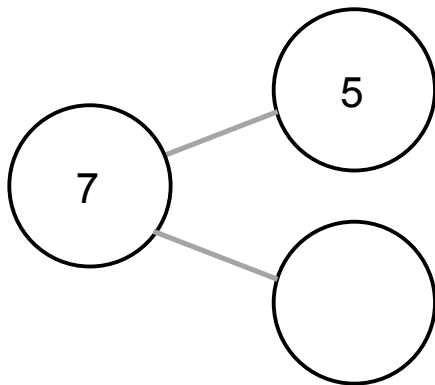
Name: _____

Date: _____

CHAPTER
2

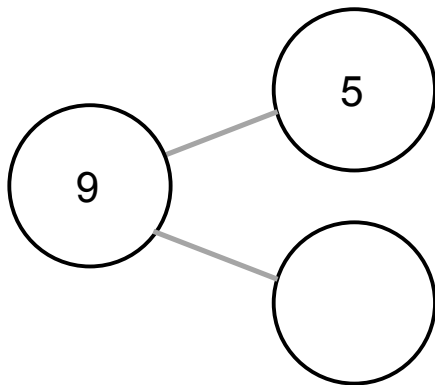
Number Bonds

1. a) What numbers make 7?



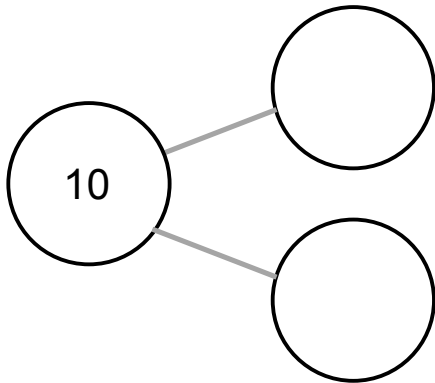
5 and _____ make 7.

b) What numbers make 9?

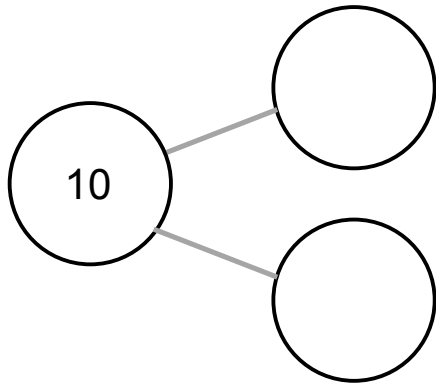


5 and _____ make 9.

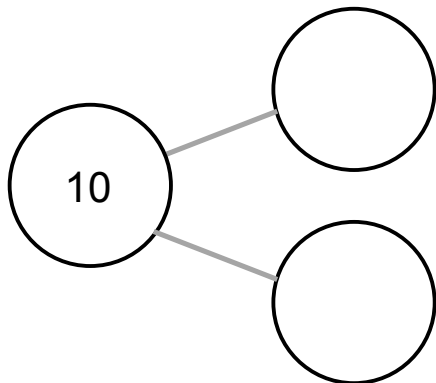
2. Make 10 three different ways.



_____ and _____ make 10.



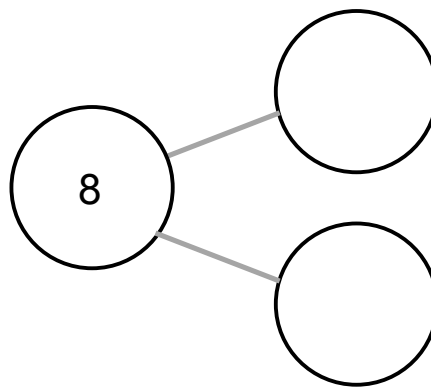
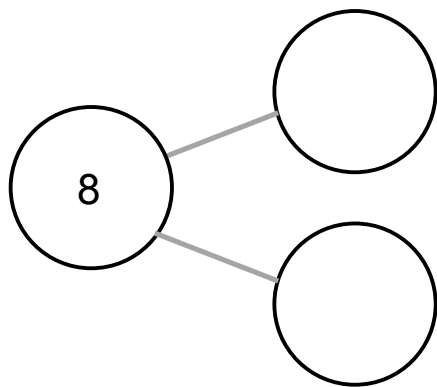
_____ and _____ make 10.



_____ and _____ make 10.

3. a) Make 8 two different ways.
Use numbers from the box.

4	5	6	0
3	7	8	



- b) Choose a number bond from above.
Draw to show the numbers.

